

Practice Sheet for All

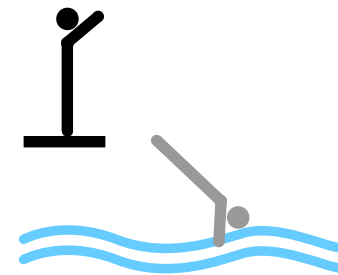
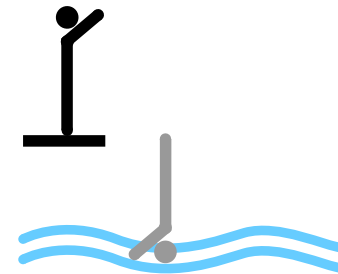
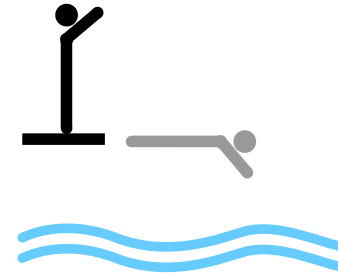
Right angle turns

Tick true or false by the side of each statement.

- | | True | False |
|---|--------------------------|--------------------------|
| 1. A right angle is 100 degrees. | <input type="checkbox"/> | <input type="checkbox"/> |
| 2. There are four right angle turns in a complete turn. | <input type="checkbox"/> | <input type="checkbox"/> |
| 3. There are three right angle turns in half a turn. | <input type="checkbox"/> | <input type="checkbox"/> |
| 4. There are two right angle turns in a half turn. | <input type="checkbox"/> | <input type="checkbox"/> |
| 5. There are 180 degrees in half a turn. | <input type="checkbox"/> | <input type="checkbox"/> |

Hot challenge: have a go at these three questions

- | | True | False |
|---|--------------------------|--------------------------|
| 6. This diver has turned through quarter of a turn. | <input type="checkbox"/> | <input type="checkbox"/> |
| 7. This diver has turned through two right angle turns. | <input type="checkbox"/> | <input type="checkbox"/> |
| 8. This diver has turned through three right angle turns. | <input type="checkbox"/> | <input type="checkbox"/> |



Y

Z

1

2

3

4

5

6

7

8

9

0