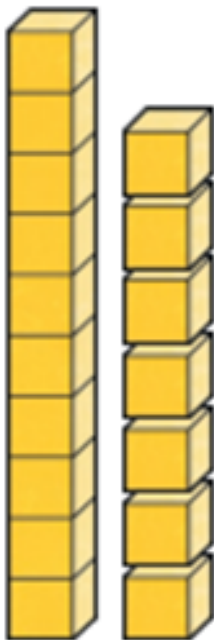


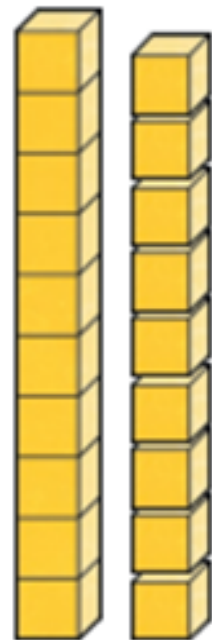
## Count One More and One Less



Jo has found one more and one less than 18. She used base ten blocks.



one less	18	one more
17		19



Use base ten to help you with these numbers.

one less	14	one more

one less	16	one more

one less	13	one more

one less	12	one more

## Count One More and One Less



18

is 1 less than

17

15

is 1 more than

14

14

is 1 more than

15

19

is 1 less than

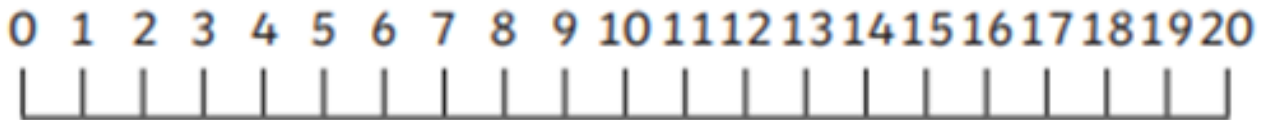
18



Mo has been making number sentences using number cards, 11-20.

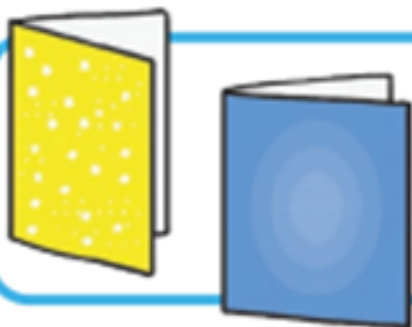
Are the sentences correct? Can you correct any mistakes?

## Count One More and One Less



At Tim's party, there are 12 girls. There is 1 more boy than there are girls. How many boys are there?

The pass the parcel present has 18 layers. One is torn off. How many layers are left?



Tim has 17 cards. This is 1 more than last year. How many did he get last year?

**Can you ask a question?**