

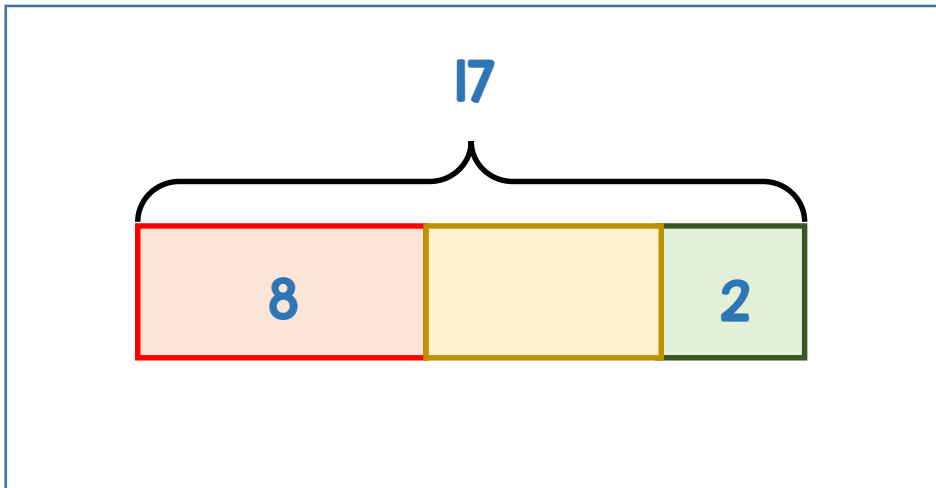


**1** Annie bakes 17 cookies.



- She eats 2 cookies.
- She gives some away.
- She has 8 cookies left.


How many cookies did she give away?



**2** Ron and Ali have the same number of marbles.

Ali gives Ron 18 marbles.

How many more marbles does Ron now have than Ali?





3


There are 65 children in year 4  
 There are  $\frac{2}{3}$  as many boys as girls  
 in year 4

How many boys are in year 4?

Boys



Girls



4

Mo and Amir have £252 in total.

- Mo spends 50% of his money.
- Amir spends  $\frac{3}{5}$  of his money.


They now have the same amount of money left.

How much money did Amir have at the start?

Mo



Amir



} £252