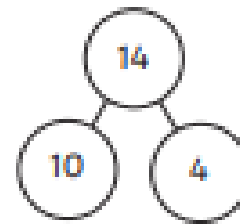
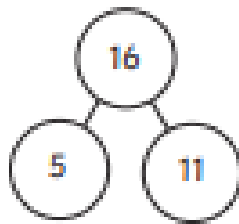


Addition and Subtraction Fact Families to 20

For each set of numbers, write four different addition and subtraction facts.



$$\square + \square = \square$$

$$\square + \square = \square$$

$$\square + \square = \square$$

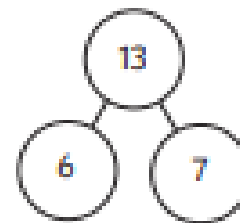
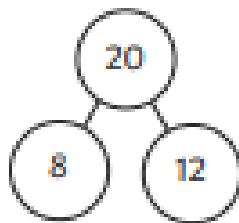
$$\square + \square = \square$$

$$\square - \square = \square$$

$$\square - \square = \square$$

$$\square - \square = \square$$

$$\square - \square = \square$$



$$\square + \square = \square$$

$$\square + \square = \square$$

$$\square + \square = \square$$

$$\square + \square = \square$$

$$\square - \square = \square$$

$$\square - \square = \square$$

$$\square - \square = \square$$

$$\square - \square = \square$$