



count up to 50

I can count up to 50.  
I can count back from  
50.

Warm-up ...

Finish the number sequence...

22, 23, 24, —, —, —, —, —,

50, 49, 48, —, —, —, —,

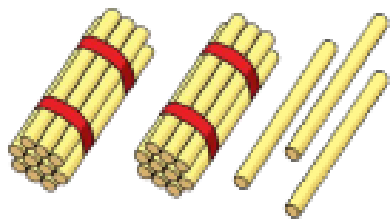
37, 38, —, —, —, —,

45, 44, 43, —, —, —, —, —,

# count up to 50


I can count up to 50.  
I can count back from 50.

Count out 23 straws. How many bundles of 10 can you make?



There are \_\_\_ tens and \_\_\_ ones.

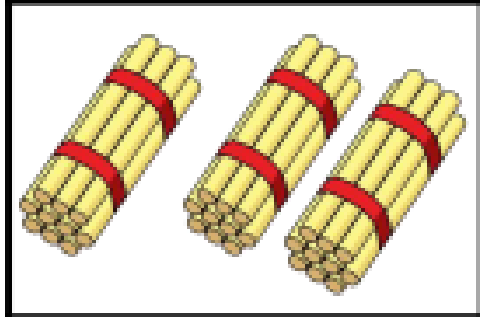

\_\_\_ tens + \_\_\_ ones = 23



count up to 50

I can count up to 50.  
I can count back from 50.

 What number is represented in the grid?

Tens	Ones
	

There are \_\_\_ tens and \_\_\_ ones.  
\_\_\_ tens + \_\_\_ ones = \_\_\_

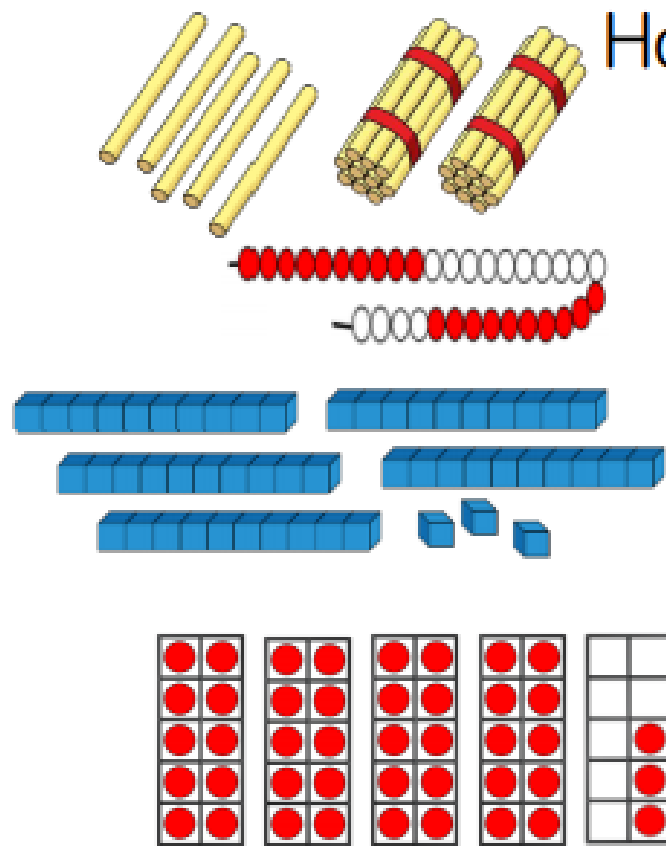
# count up to 50

I can count up to 50.  
I can count back from 50.

Match the pictures and words.

- Four tens and three ones
- Two tens and five ones
- Three tens and four ones
- Three ones and five tens

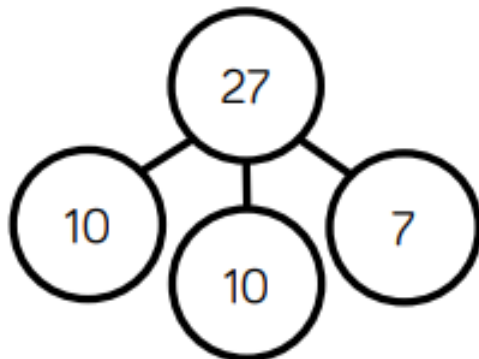

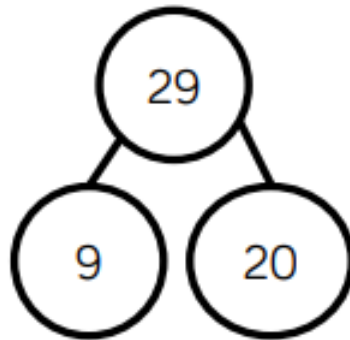

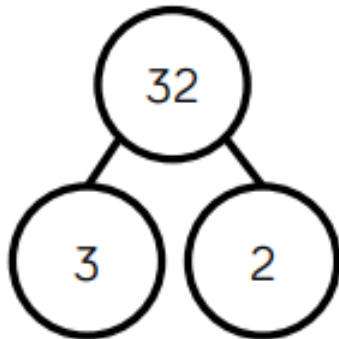
How many?



Four empty boxes for answers:

# count up to 50

The children are completing the part whole models.



Are they correct?  
Explain why.

I can count up to 50.  
I can count back from 50.

