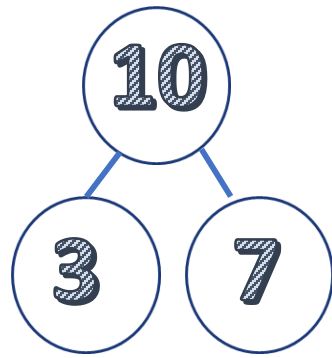


$___ + ___ =$

$___ + ___ =$

$___ - ___ =$

$___ - ___ =$

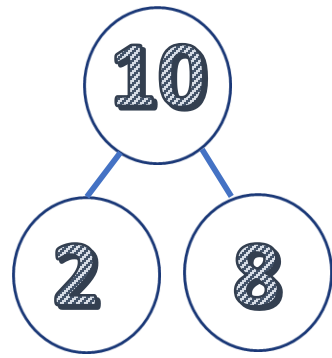


$___ + ___ =$

$___ + ___ =$

$___ - ___ =$

$___ - ___ =$

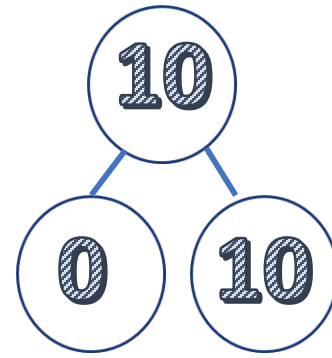


$___ + ___ =$

$___ + ___ =$

$___ - ___ =$

$___ - ___ =$



$___ + ___ =$

$___ + ___ =$

$___ - ___ =$

$___ - ___ =$